

Şekil Sayı Eşleştirme

+

= 6

→

= 8

☆

= 2

×

= 3

⬠

= 0

□

= 9

△

= 7

◇

= 1

▽

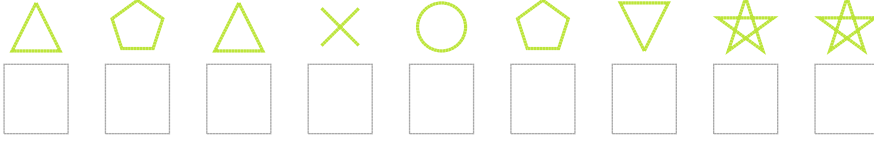
= 5

○


= 4

Aşağıdaki uzun şifreleri hatasız çözerek altlarına yazın:

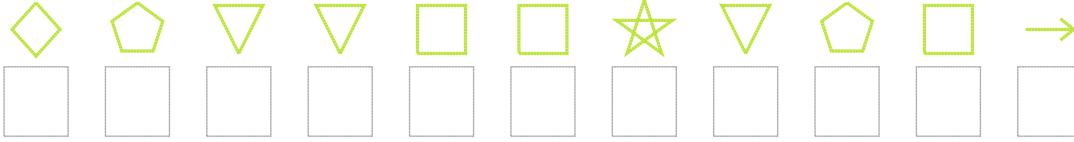
1. Şifre



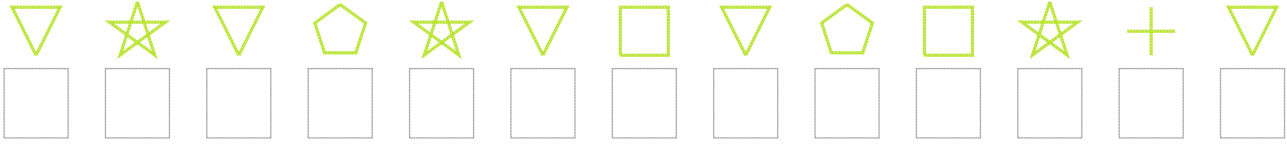
2. Şifre



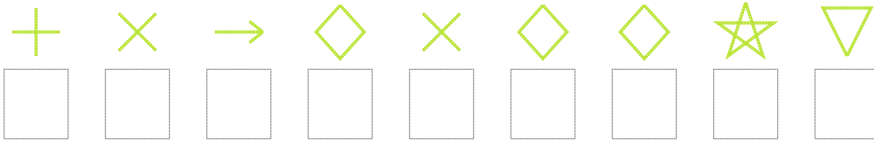
3. Şifre



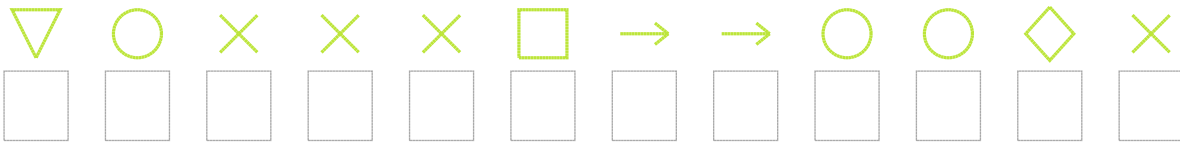
4. Şifre



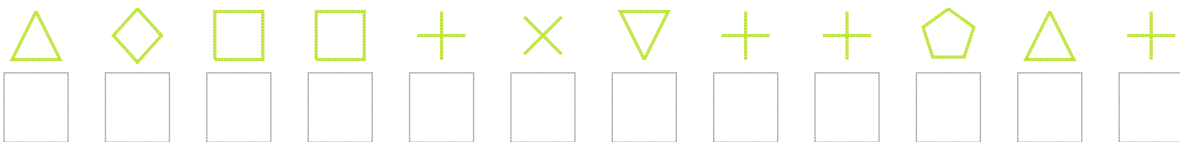
5. Şifre



6. Şifre



7. Şifre



❑ BONUS: 2. ve 7. şifrenin ilk rakamının toplamı kaçtır?

Cevap Anahtarı

1. Şifre: 707340522
2. Şifre: 6224212283266
3. Şifre: 10559925098
4. Şifre: 5250259509265
5. Şifre: 638131125
6. Şifre: 543339884413
7. Şifre: 719963566076

□ Bonus Soru Cevabı: 13